

Wiskunde B1,2 (nieuwe stijl)

Examen VWO 2003

Examennummer

Tijdvak 1
Donderdag 22 mei
13.30 – 16.30 uur

.....

Naam

.....

Vraag 10

$A \bullet$

$\bullet B$

 k

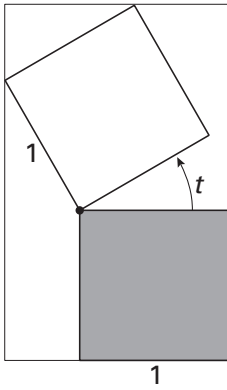
Vraag 11

$A \bullet$

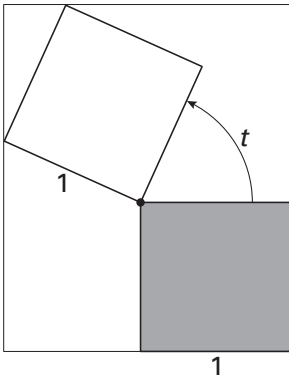
$\bullet B$

 k

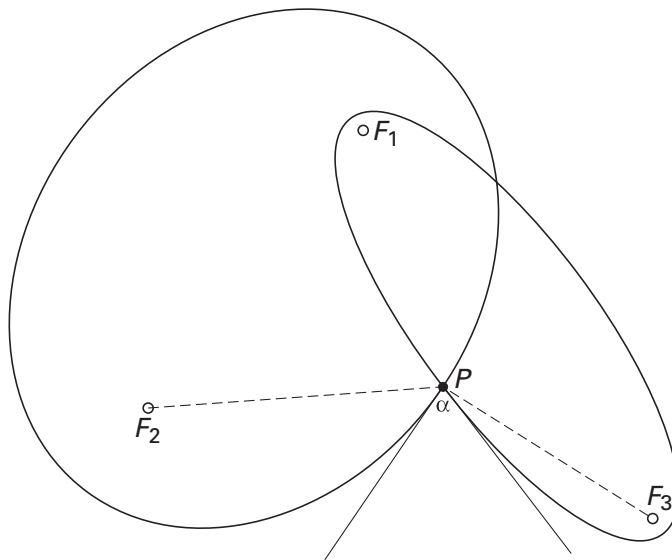
Vraag 15



Vraag 16



Vraag 18



Vraag 19

